



**BHARATIYA VIDYA BHAVAN'S V.M.PUBLIC SCHOOL, VADODARA**  
**SESSION 2017-18**

**Question bank**  
**Chapter 7 – Basic Geometrical Ideas**

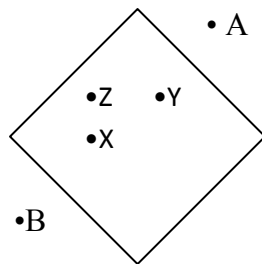
Q1. Draw a line segment and label its end points.

Q2. Classify the following figures as open or closed



Q3. Mark a point A on a page. Draw five lines passing through it. Can you draw more lines passing through A. How many lines can be drawn?

Q4. Name the points which are inside the figure, on the figure, or outside the figure.



Q5. Classify each one of the following angles as right, straight, acute, obtuse or reflex

